



Verbal Reasoning

1

Find the two words, one from each group, that are most opposite in meaning.

(aloof happy proud)

(dull friendly cold)

2

The three words in the second group should go together in the same way as the three in the first group. Find the missing word from the second group options and mark it in the space provided.

late (darts) scored / cuboid (_____) drills

cloud culls boils solid soils

Non Verbal Reasoning

3

Which shape is the odd one out?



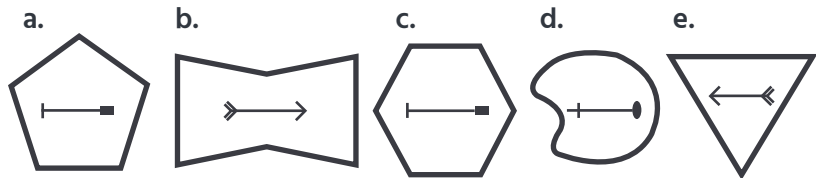
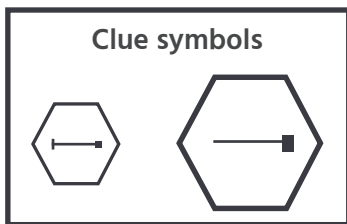
Answer: _____



Non Verbal Reasoning

4

Which one of the 5 answer symbols is most closely similar to both of the given symbols?



Maths

5

Which is the same ratio as 15:35? Circle the correct answer.

a. 10:25

b. 18:37

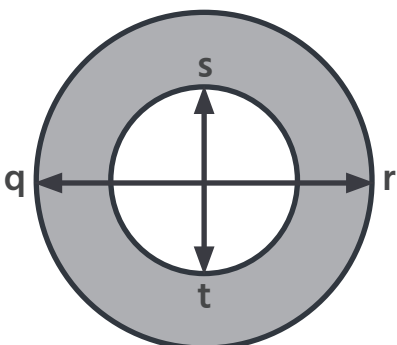
c. 3:7

d. 15:70

e. 30:60

6

These two circles are concentric. The diameter $qr = 25\text{mm}$, the diameter $st = 15\text{mm}$. What is the width of the shaded ring?



Answer: _____



English

7

Identify the subordinate clause in the sentence below. Underline your answer.

While in class, Michaela tries to figure out what type of artist she is.

8

Identify the sentences below as either simple/complex AND as active/passive by writing in the spaces provided.

The motorbike was driven by Amanpreet.

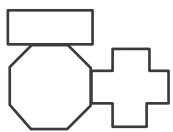
Spatial Reasoning

9

Which of the options matches the composite shape created when all the shapes are joined together by the corresponding letters?



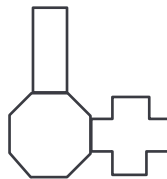
Answer: _____



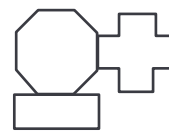
A



B



C



D



E

10

Which option is a plan view of the 3D shape on the left?

Answer: _____

