

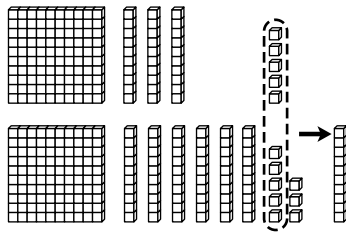
Name _____

Adding Three-Digit Numbers

Example

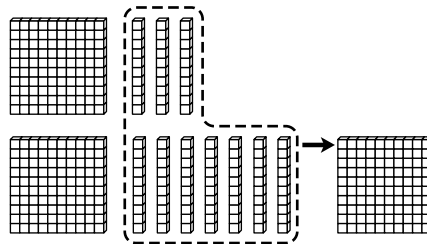
The class has 135 books. They got 168 more books.
How many books in all? Follow the steps to add.

① Add the ones.
Regroup.



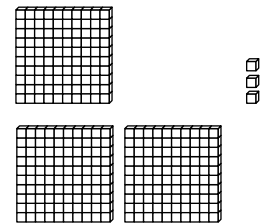
	H	T	0
		3	5
+	1	6	8
			3

② Add the tens.
Regroup.



	H	T	0
		1	3
+	1	6	8
		0	3

③ Add the hundreds.



	H	T	0
	1	1	3
+	1	6	8
	3	0	3

Add. Draw or use models if you like.

1.

	H	T	0
		4	9
+	3	7	0

2.

	H	T	0
		2	3
+	3	8	8

Name _____

Adding Three-Digit Numbers (continued)

Find each sum. Regroup if needed.

Draw or use models if you like.

3.

	H	T	O
	<input type="text"/>	<input type="text"/>	
	1	3	6
+	2	1	5
<hr/>			
	3	5	1

Add ones.

Regroup?

yes no

Add tens.

Regroup?

yes no

Add hundreds.

4.

	H	T	O
	<input type="text"/>	<input type="text"/>	
	2	1	7
+	5	4	8
<hr/>			

	H	T	O
	<input type="text"/>	<input type="text"/>	
	3	5	3
+	2	7	4
<hr/>			

	H	T	O
	<input type="text"/>	<input type="text"/>	
	7	3	1
+		8	5
<hr/>			

	H	T	O
	<input type="text"/>	<input type="text"/>	
	6	3	6
+	2	7	1
<hr/>			

5.

	H	T	O
	<input type="text"/>	<input type="text"/>	
	4	0	7
+	1	7	5
<hr/>			

	H	T	O
	<input type="text"/>	<input type="text"/>	
	5	4	0
+	3	7	0
<hr/>			

	H	T	O
	<input type="text"/>	<input type="text"/>	
		8	4
+	5	5	5
<hr/>			

	H	T	O
	<input type="text"/>	<input type="text"/>	
	8	1	1
+	1	0	9
<hr/>			