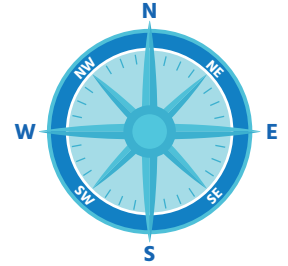
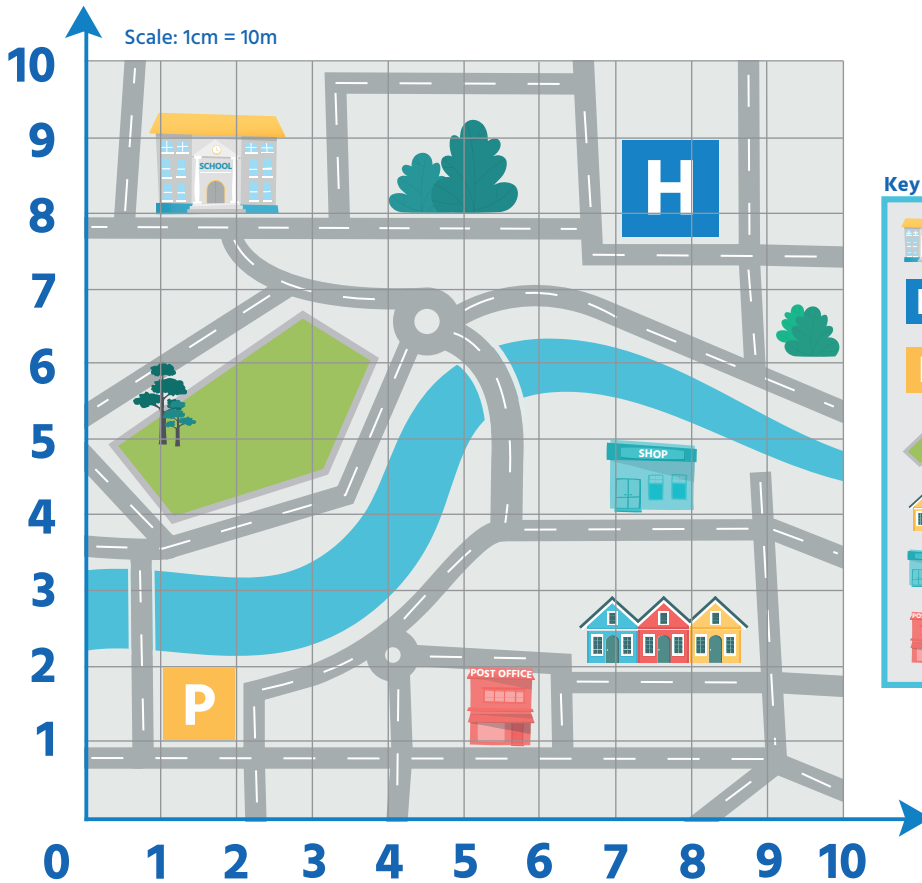




CHALLENGE ONE

Map of Discovery town



Key

	School
	Hospital
	Car park
	Park
	Home
	Shop
	Post office

- 1 **Imagine that you come out of your house and you want to walk to the shop.**
What compass direction would you need to walk in?
- 2 **A tourist stops you outside the post office and asks you for directions to the park.**
Use compass points and the scale to direct them from the post office to the park.
- 3 **Use the key on your map to locate the car park.** What are the coordinates of the car park?



4 What does this symbol on the map represent?

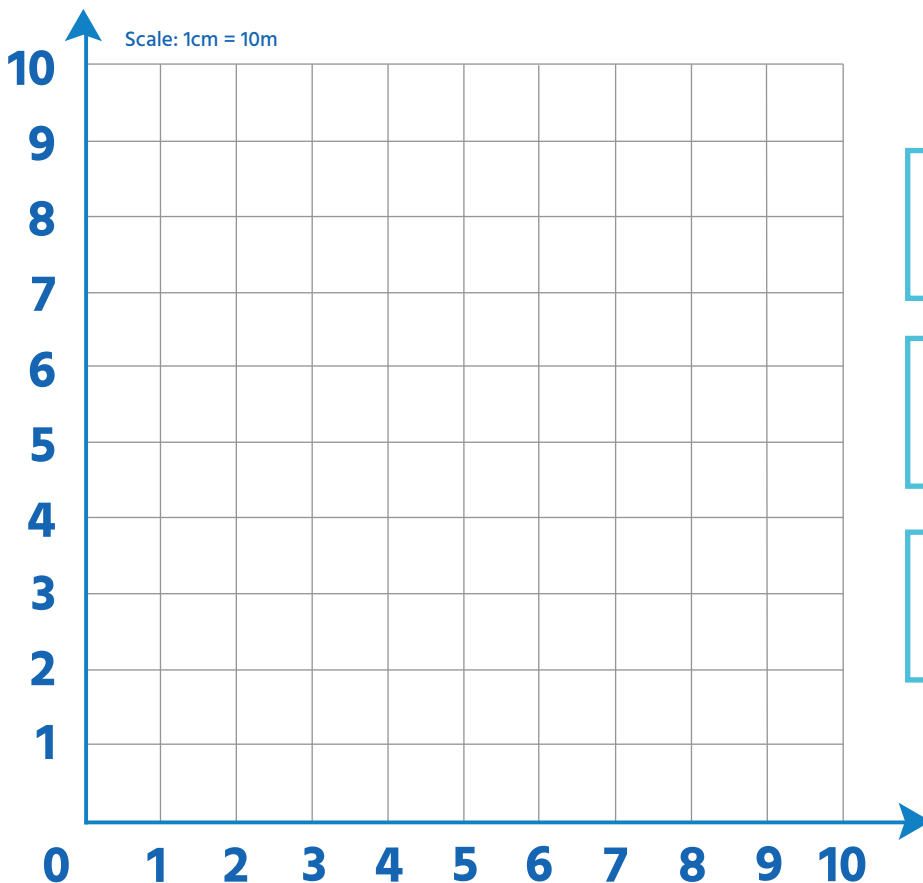
H

5 What are the coordinates of the school?

6 Can you plot something new on your town map at the coordinates (7,1)?

CHALLENGE TWO

Go on a walk of your local area and create your own map.



Can you plot local landmarks onto your map?

How does your map differ to the one above?

What would you add to your local area map if you could?